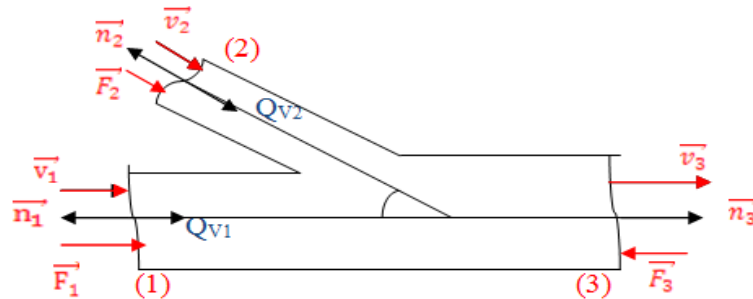


Solution de TD MDF

EXERCICE 01 :



Le théorème de quantité de mouvement:

$$\underbrace{\iint \rho \vec{v}_i (\vec{v}_i \cdot \vec{n}_{ext}) d\delta}_I = \underbrace{\sum \vec{F}_{ext}}_{II} \quad (*)$$

Le terme I :

$$I = \iint_{-v_1} \rho \vec{v}_1 (\vec{v}_1 \cdot \vec{n}_1) d\delta + \iint_{-v_2} \rho \vec{v}_2 (\vec{v}_2 \cdot \vec{n}_2) d\delta + \iint_{v_3} \rho \vec{v}_3 (\vec{v}_3 \cdot \vec{n}_3) d\delta$$

$$I = -\rho v_1 \vec{v}_1 \iint d\delta - \rho v_2 \vec{v}_2 \iint d\delta + \rho v_3 \vec{v}_3 \iint d\delta$$

$$I = -\rho v_1 \vec{v}_1 S_1 - \rho v_2 \vec{v}_2 S_2 + \rho v_3 \vec{v}_3 S_3$$

Le terme II :

$$\sum \vec{F}_{ext} = M \cdot \vec{g} + \vec{F}_1 + \vec{F}_2 + \vec{F}_3 - \vec{R}$$

$$(*) \leftrightarrow -\rho v_1 \vec{v}_1 S_1 - \rho v_2 \vec{v}_2 S_2 + \rho v_3 \vec{v}_3 S_3 = M \cdot \vec{g} + \vec{F}_1 + \vec{F}_2 + \vec{F}_3 - \vec{R}$$

La projection selon l'axe $\vec{o}\vec{x}$:

$$-\rho v_1^2 S_1 - \rho v_2^2 S_2 \cos 30 + \rho v_3^2 S_3 = 0 + F_1 + F_2 \cos 30 - F_3 - R_x$$

$$R_x = \rho v_1^2 S_1 + \rho v_2^2 S_2 \cos 30 - \rho v_3^2 S_3 + F_1 + F_2 \cos 30 - F_3$$

$$R_x = \rho v_1^2 S_1 + \rho v_2^2 S_2 \cos 30 - \rho v_3^2 S_3 + P_1 S_1 + P_2 S_2 \cos 30 - P_3 S_3$$

Calcul des vitesses :

$$q_{v_3} = q_{v_1} + q_{v_2} = 0.282 \text{ m}^3/\text{s}$$

$$v_1 = \frac{4q_{v1}}{\pi D_1^2} = \frac{4 \times 0.201}{\pi(0.4)^2} = 1.6 \text{ m/s}$$

$$v_2 = \frac{4q_{v2}}{\pi D_2^2} = \frac{4 \times 0.081}{\pi(0.25)^2} = 1.65 \text{ m/s}$$

$$v_1 = \frac{4q_{v1}}{\pi D_1^2} = \frac{4 \times 0.282}{\pi(0.4)^2} = 2.24 \text{ m/s}$$

$$R_x = 6.376 \times 10^5 \times 0.125 + 6.376 \times 10^5 \times 0.049 \times \cos 30 - 6.278 \times 10^5 \times 0.125 + 10^3 \times 0.125 \times (1.6)^2 + 10^3 \times (1.65)^2 \times 0.049 \times \cos 30 - 10^3 \times (2.24)^2 \times 0.125$$

$$R_x = \dots N$$

La projection selon l'axe \vec{oZ} :

$$\rho v_2^2 S_2 \sin 30 = -Mg - F_2 \sin 30 - R_z$$

$$R_z = -Mg - F_2 \sin 30 - \rho v_2^2 S_2 \sin 30$$

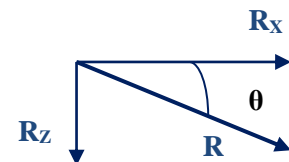
En négligent le poids devant les autres forces :

$$R_z = -P_2 S_2 \sin 30 - \rho v_2^2 S_2 \sin 30$$

$$R_z = -6.376 \times 10^5 \times 0.049 \sin 30 - 10^3 \times (1.65)^2 \times 0.049 \times \sin 30$$

$$R_z = \dots N$$

$$R = \sqrt{R_x^2 + R_z^2} = \dots N$$

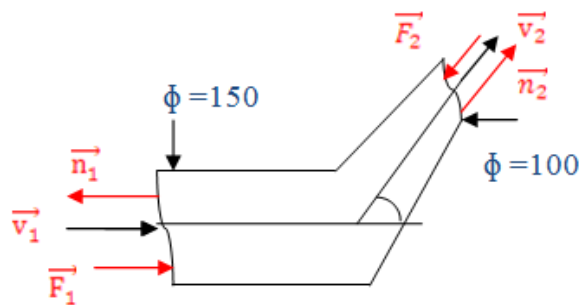


$$\text{Et : } \theta = \dots$$

EXERCICE 02 :

Donnée :

- $q_v = 40 \frac{l}{s} = 0.040 \text{ m}^3/s$
- $P_{1ef} = 4 \text{ bars} = 4 \times 10^5 \text{ Pa}$
- $P_{2ef} = 4 \times 10^4 \text{ Pa}$
- $D_1 = 150 \text{ mm} = 0.15 \text{ m}$
- $D_2 = 100 \text{ mm} = 0.1 \text{ m}$
- $\alpha = 60^\circ$



Le théorème de quantité de mouvement:

$$\underbrace{\iint_I \rho \vec{v}_i (\vec{v}_i \cdot \vec{n}_{ext}) d\delta}_I = \underbrace{\sum_{II} \vec{F}_{ext}}_{II} \quad (*)$$

Le terme I :

$$I = \iint \rho \vec{v}_1 \underbrace{(\vec{v}_1 \cdot \vec{n}_1)}_{-v_1} d\delta + \iint \rho \vec{v}_2 \underbrace{(\vec{v}_2 \cdot \vec{n}_2)}_{+v_2} d\delta$$

$$I = -\rho v_1 \vec{v}_1 \iint d\delta + \rho v_2 \vec{v}_2 \iint d\delta$$

$$I = -\rho v_1 \vec{v}_1 S_1 - \rho v_2 \vec{v}_2 S_2 = q_m (\vec{v}_2 - \vec{v}_1)$$

Avec : $q_m = \rho v_1 S_1 = \rho v_2 S_2 = \text{cst}$

Le terme II :

$$\sum \vec{F}_{\text{ext}} = M \cdot \vec{g} + \vec{F}_1 + \vec{F}_2 - \vec{R}$$

$$q_m (\vec{v}_2 - \vec{v}_1) = M \cdot \vec{g} + \vec{F}_1 + \vec{F}_2 - \vec{R}$$

La projection selon l'axe \vec{Ox} :

$$q_m (v_2 \cos 60 - v_1) = F_1 - F_2 \cos 60 - R_x$$

$$R_x = F_1 - F_2 \cos 60 + q_m (v_1 - v_2 \cos 60)$$

$$R_x = P_1 S_1 - P_2 S_2 \cos 60 + q_m (v_1 - v_2 \cos 60)$$

$$S_1 = \frac{\pi D_1^2}{4} = \frac{\pi (0.15)^2}{4} = 0.0176 \text{ m}^2$$

$$S_2 = \frac{\pi D_2^2}{4} = \frac{\pi (0.1)^2}{4} = 0.0078 \text{ m}^2$$

$$q_v = v_1 S_1 = v_2 S_2$$

$$\Rightarrow \left\{ \begin{array}{l} v_1 = \frac{q_v}{S_1} = \frac{0.04}{0.0176} = 2.263 \text{ m/s} \\ v_2 = \frac{q_v}{S_2} = \frac{0.04}{0.0078} = 5.092 \frac{\text{m}}{\text{s}} \end{array} \right.$$

$$R_x = 4 \times 10^5 \times 0.0176 - 4 \times 10^4 \times 0.0078 \cos 60 + 0.04 \times 10^3 \times (2.263 - 5.092 \cos 60)$$

$$R_x = \dots \text{ N}$$

La projection seln l'axe \vec{Oz} :

$$q_m (v_2 \sin 60) = -F_2 \sin 60 - R_z$$

$$R_z = -F_2 \sin 60 - q_m (v_2 \sin 60)$$

$$R_z = -P_2 S_2 \sin 60 - \rho q_v (v_2 \sin 60)$$

$$R_z = -4 \times 10^4 \times 0.0078 \times \sin 60 - 10^3 \times 0.04 \times 5.092 \times \sin 60$$

$$R_z = \dots \text{ N}$$

$$R = \sqrt{R_x^2 + R_z^2} = \dots \text{ N}$$

$$\text{Et : } \theta = \dots$$